

THIS COMPLETED PACKET MUST BE HANDED IN TO RECEIVE CREDIT FOR THIS CLASS

NAME: _____

DATE: _____

CLASS TIME: _____

LEARNER PERMIT #: _____

PARENT'S CONFIRMATION OF CLASS ATTENDANCE:

I, _____, confirm that the above individual attended two hours
(print parent name)
of the online class (outlined below) at the above date and time.

PARENT'S SIGNATURE: _____

CHAPTER 8.1: Sharing the Roadway

Chapter 8 sections...

- 8.1 – Sharing the Roadway with Motorcyclists
- Protecting Bicyclists
- Pedestrians
- Emergency Vehicles
- Following Large Trucks

Please read the above chapter sections and complete the following questions. (take the information directly out of the book. Do NOT summarize or paraphrase.)

1. Why must vehicle drivers accept responsibility for protecting motorcyclists?

2. Identify 5 specific ways to protect bicycles. (one is found in the text *prior* to the bulleted strategies)

3. What are 4 areas you are likely to see pedestrians?

4. What procedures should you follow to clear the way for emergency vehicles?

5. Define 'No Zones'. What precautions do you take when following a large truck?

CHAPTER 8.2: Sharing the Road

Complete the following textbook work...

“Check Knowledge”, page 170

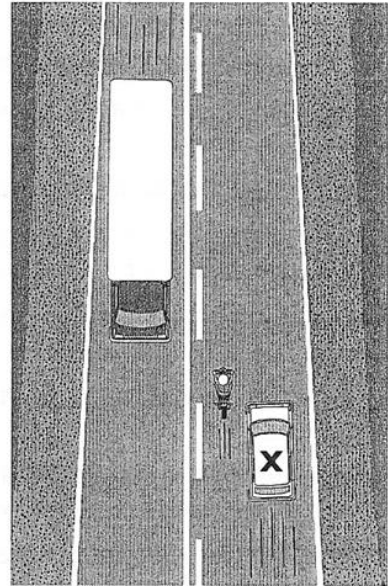


- 1.
- 2.
- 3.
- 4.
- 5.
- 6.

“Vocabulary”, (choose a letter from list B), page 170

- 7.
- 8.
- 9.
- 10.
- 11.
- 12.

Use the Pictures

Examine the pictures below and write the mistakes made by each motorcyclist. What action should driver X take to avoid a collision?



1. _____

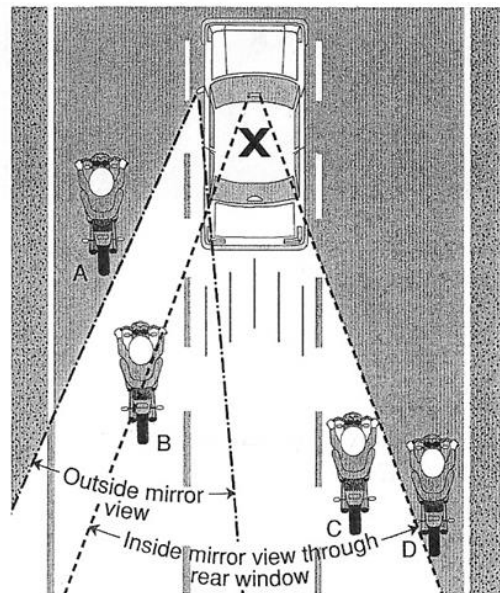
2. _____

3. _____

Study the Diagram

Analyze the position of the motorcycles in relation to vehicle X and answer the questions below.

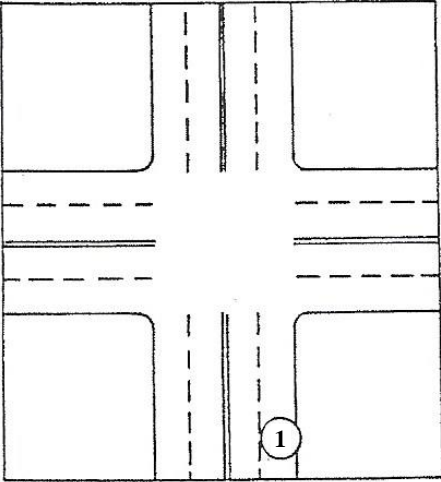
- _____ 1. Which motorcyclists are in zones that cannot be seen in either mirror?
- _____ 2. Which motorcyclist is the most difficult to see as part of the visual search pattern?
- _____ 3. Which motorcyclist can be seen in the inside mirror?
- _____ 4. Which motorcyclist can be seen in the outside mirror?
- _____ 5. Which pair of motorcyclists, A and B or C and D, is positioned correctly in their lane?



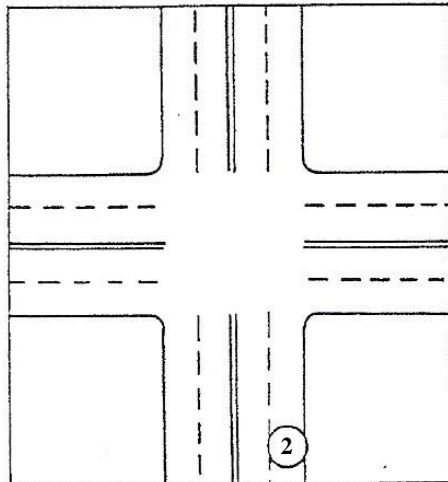
Chapter 8 – Making Turns

Name _____

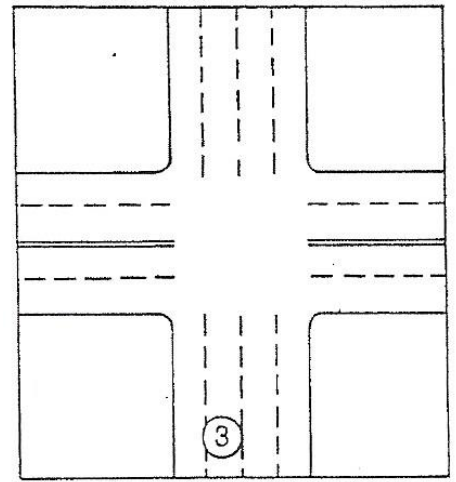
The intersections shown below have two-way streets, one-way streets, or combinations of both. On this particular worksheet, all of the broken lines are white. Select the correct path of travel for the turn described under each picture. Draw a line with an arrow from the circled number to the location where you would finish the turn.



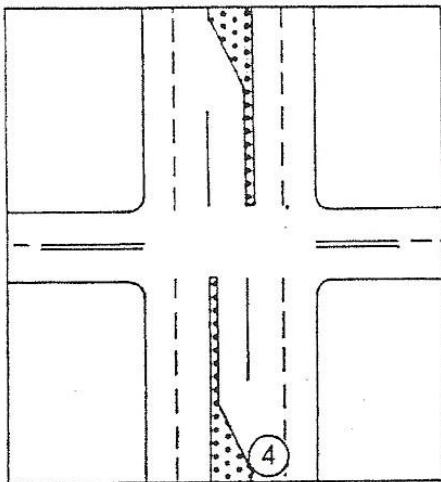
Right Turn



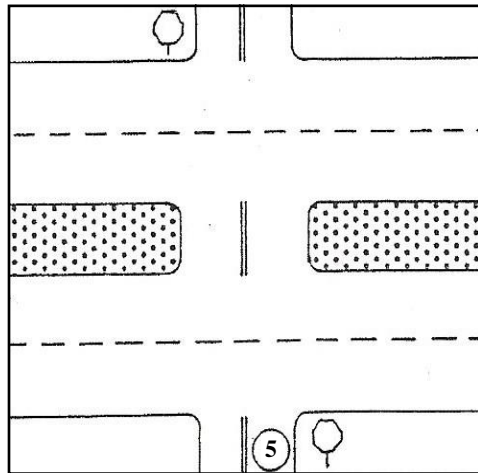
Left Turn



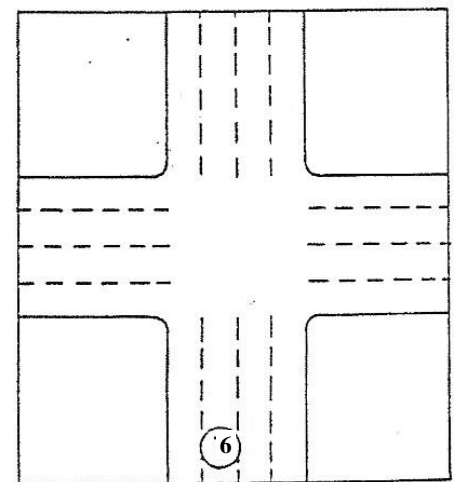
Left Turn



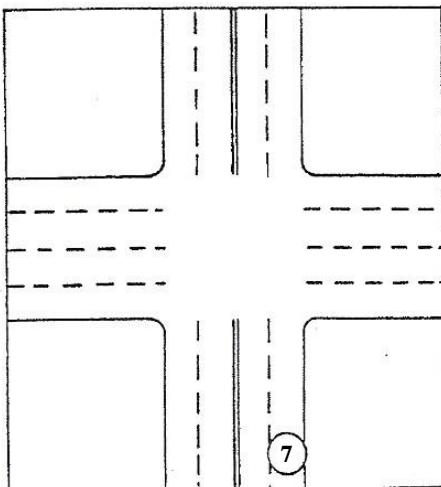
Left Turn



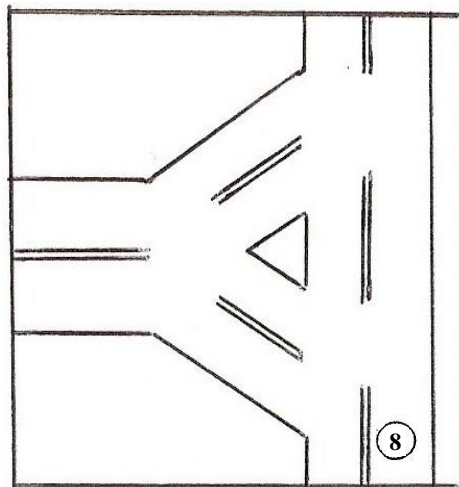
Left Turn



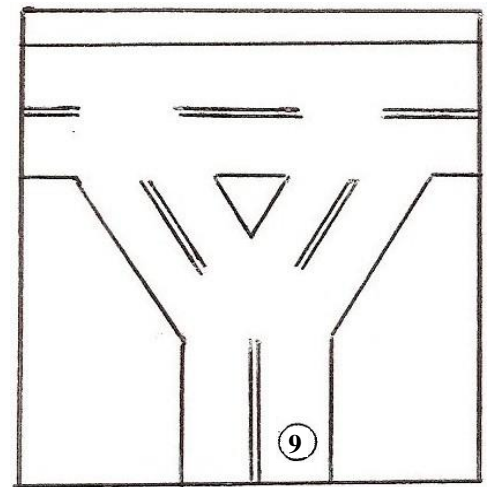
Left Turn



Left Turn



Left Turn



Left Turn